



# K.D.M.A International

Winter Holiday Homework  
Class- VI(2025-26)

Dear Parents,

It's vacation time! Time to refresh yourself and visit new places. At the same time, we want our students to learn and explore more. So here we have fun filled holiday homework. Please take a printout of the homework sheets and paste it into notebooks according to subjects. Please take care of the neatness of work.


## NOTE

- Winter Break commence from 31.12.2025 (Wednesday) to 14.01.2026 (Wednesday).
- The School reopens on 15.01.2026 (Thursday).
- The date of submission of Winter Holiday Homework is 20.01.2026.

*Priyanka*  
Priyanka Saigal  
(Principal)  
30/12/25

*Neha*  
Neha Lodhi  
(Coordinator)  
19/12/25

Happy & Winter  
HAPPY HOLIDAYS





# **K.D.M.A International**

**Winter Holiday Homework**

**PRACTICE SHEET**

**ENGLISH CLASS VI**

NAME \_\_\_\_\_ ROLL NO \_\_\_\_\_ SEC \_\_\_\_\_

**Q1. Read the following story carefully and answer the questions given at the end.**

We must do all we can to stop conflicts and civil war. Most conflicts happen in poor countries, especially which are badly governed or where power and wealth are not distributed fairly between different tribal or religious groups. So the best way to check fighting is to make a political arrangement in which all groups have their representatives. The need is to ensure human rights and economic development of all.

The next fundamental freedom is one that is not mentioned in the UN charter. In 1945, the leaders could not imagine that such a situation would arise. That is the freedom of future generations to live on this planet.

Even now many of us have not understood its importance. We are using up the limited resources for our present use. We are over using and even wasting them. We are, in fact, robbing our children of their right to live.

We must preserve our forests, fisheries and wildlife. All of these are collapsing because of our own habit of consuming or destroying them.

**(a) Why do most conflicts happen in poor countries?**

---

---

**(b) What is the best way to check conflicts?**

---

---

**(c) How are we robbing our children of their basic right?**

---

---

---

**(d) Find words from the passage that mean the same as-**

- (i) fighting - \_\_\_\_\_
- (ii) keep safely - \_\_\_\_\_

**Q2. Fill in the blanks with suitable collective nouns-**

- (i) The police has arrested a \_\_\_\_\_ of thieves.
- (ii) The \_\_\_\_\_ of pupils are listening to the teacher attentively.
- (iii) A \_\_\_\_\_ of doctors arrived at the hospital.
- (iv) The \_\_\_\_\_ of people gathered outside the mall.
- (v) A \_\_\_\_\_ of musicians will perform in the party tonight.

**Q3. Complete the sentences using suitable word-**

- (i) The Sahara is the largest \_\_\_\_\_ in the world (dessert / desert)
- (ii) The old man's eye \_\_\_\_\_ is quite weak. (sight / site)
- (iii) I had \_\_\_\_\_ (eight/ate) dollars left to play video games.
- (iv) I felt \_\_\_\_\_ (week/weak) after I worked the whole day.
- (v) My parents \_\_\_\_\_ (allowed/aloud) me to watch a **movie** \_\_\_\_\_ with my friend.

**Q4. Fill in the blanks with the suitable articles:**

- (i) Dog is \_\_\_\_\_ useful animal.
- (ii) Honest people speak \_\_\_\_\_ truth.
- (iii) Look at \_\_\_\_\_ white cloud.
- (iv) world is \_\_\_\_\_ happy place to most people.
- (v) \_\_\_\_\_ sun shines brightly.

**Q5. You are Rohan / Ritika, Cultural Secretary of St. Columbus School, Shimla. Your school is organizing Group Dance Competition. Write a notice in about 50 words, inviting students of classes VI- VIII to participate in the Dance Competition.**



# K.D.M.A International

## Winter Holiday Homework

### MATHEMATICS PRACTICE SHEET

#### CLASS VI

Note: Do it in MATHS REGISTER.

Q1. Place commas correctly and write the numerals:

- Seven crore four lakh Sixty nine
- Eighty seven million eight hundred twenty five thousand fifty two
- Forty six lakh thirty thousand ten
- Two hundred thirty nine thousand seven hundred eighty six

Q2. Arrange the following numbers in ascending and descending order.  
199988, 1704382, 200175, 1702497, 201200, 1712040.

Q3 Write the following numbers in the Indian as well as in International system of numeration:

- 90703006
- 68045765
- 1396478
- 35301905

Q4. The product of two numbers is 36. Their sum is twenty. What are the numbers?

Q5. Express each of the following as roman numeral:

- 49
- 263
- 137
- 389
- 625

Q6. The distance between two towns is 26 km 700 m. A bus takes 5 rounds between the two rounds in a day. How much distance will it cover in a week?

Q7. Find the difference between the largest and the smallest six digit numbers formed by using the digits 0, 3, 5 and 9.

Q8. A box contains 4 strips of antibiotics capsules. Each strips has 9 capsules and each capsule contains 250 mg of medicine. What will be the total weight of medicine in grams in 50 such boxes?

Q9. What is the product of the place value and face value of 8 in 783249?

Q10. Replace  $\square$  with suitable digit

$$\begin{array}{r} 3 \quad 9 \quad 4 \quad 1 \\ - \square \quad \square \quad 7 \quad 8 \\ \hline 1 \quad 8 \quad \square \quad \square \end{array}$$

Q11. Rohit buys 10 notebooks and 10 pencils. If the cost of one notebook is Rs 15 and one pencil is Rs 10. How much money did he spend?

Q12. What is the difference between the smallest 7 digit number and the largest 6 digit number





# **K.D.M.A International**

## **Winter Holiday Homework**

### **MATHEMATICS PRACTICE SHEET**

#### **CLASS VI**

**Note: Do it in MATHS REGISTER.**

**Q1. Place commas correctly and write the numerals:**

- a. Seven crore four lakh Sixty nine
- b. Eighty seven million eight hundred twenty five thousand fifty two
- c. Forty six lakh thirty thousand ten
- d. Two hundred thirty nine thousand seven hundred eighty six

**Q2. Arrange the following numbers in ascending and descending order.**  
199988, 1704382, 200175, 1702497, 201200, 1712040.

**Q3 Write the following numbers in the Indian as well as in International system of numeration:**

- a) 90703006      b) 68045765      c) 1396478      d) 35301905

**Q4. The product of two numbers is 36. Their sum is twenty. What are the numbers?**

**Q5. Express each of the following as roman numeral:**

- a) 49      b) 263      c) 137      d) 389      e) 625

**Q6. The distance between two towns is 26 km 700 m. A bus takes 5 rounds between the two rounds in a day. How much distance will it cover in a week?**

**Q7. Find the difference between the largest and the smallest six digit numbers formed by using the digits 0, 3, 5 and 9.**

**Q8. A box contains 4 strips of antibiotics capsules. Each strips has 9 capsules and each capsule contains 250 mg of medicine. What will be the total weight of medicine in grams in 50 such boxes?**

**Q9. What is the product of the place value and face value of 8 in 783249?**

**Q10. Replace  $\square$  with suitable digit**

$$\begin{array}{r} 3 \quad 9 \quad 4 \quad 1 \\ - \square \quad \square \quad 7 \quad 8 \\ \hline 1 \quad 8 \quad \square \quad \square \end{array}$$

**Q11. Rohit buys 10 notebooks and 10 pencils. If the cost of one notebook is Rs 15 and one pencil is Rs 10. How much money did he spend?**

**Q12. What is the difference between the smallest 7 digit number and the largest 6 digit number?**



# **K.D.M.A International**

## **Winter Holiday Homework**

### **CLASS VI**

### **SCIENCE PRACTICE SHEET**

#### **Q1. Do the following questions in Science Notebook:**


1. Tasty food is not always nutritious and nutritious food may not always be tasty to eat. Comment with examples.
2. Tina avoids eating vegetables but likes to eat biscuits, noodles and white bread. She frequently complains of stomach ache and constipation. What are the food items that she should include in her diet to get rid of the problem? Give reason for your answer.
3. Why do you think oxygen dissolved in water is important for the survival of aquatic animals and plants?
4. A shopkeeper keeps similar types of materials at one place. Why?
5. Why oil and water does not mix?
6. Why some metallic objects lose their shine and appear dull?
7. "A, B, C and D are all living organisms. A, B and C need readymade food whereas D can make its own food by a natural process.  
The organism A can eat B as well as D. The organism B eats only D or its products whereas organism C eats only organism B".

Based on above information, answer the questions given below.

- (a) What is organism A? Give one example of A.
  - (b) Name the organism B. Give one example of B.
  - (c) What are organisms like C called? Give one example of C.
  - (d) What is the general name of organisms like D? Give one example of D.
  - (e) Name the process E.
- 
8. (a) If you and your friends are given the choice of eating food in a plastic plate or a banana leaf platter, which one would you prefer and why?  
(b) How does plastic affect the environment adversely?

**Topic: Environment Protection Activities**

**Students have to do any one of the following activities:**



**1. Create a Small Kitchen Garden at Home**

(Grow vegetables/herbs)

OR

**2. Set up a Bird Feeder and Water Bowl for Birds**

OR

**3. Collect Environmental News and make a Short Awareness Video (Duration: 1–2 minutes)**

(Prepare a short report or scrapbook on environmental issues)

OR

**4. Create a bird-friendly nesting station using coconut husks and other natural materials.**

**Project Proof Submission**

- Take photographs / short videos while doing the activities  
Attach them in your project file.

**Project File Work**

**Write the following things in your project file.**

**1. Short Note for Each Activity Include:**

(a) What did you do?

(b) When and where did you do it?

**2. Benefits to the Environment**


(a) How did your action help nature?


**3. Learning Outcome**

(a) What did you learn from this project?

**4. Future Commitment**

(a) How will you continue helping the environment?

  
Priyanka Saigal  
(Principal)  
28-12-25

  
Neha Lodhi  
(Coordinator)  
19/12/25